

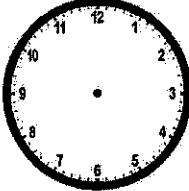
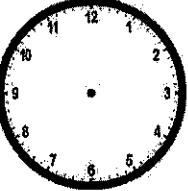



First Grade Weekly Homework Choice Board

Student _____

Week: Jan 29-Feb 2, 2018

Complete each item. Check each item as your child finishes it. All students should read at least 20 minutes each night. Study your sight words.

Reading/Writing	Math	
<p>MyOn.com username: student id# password: read Read at least 2 books and take the quiz for each book. <input type="checkbox"/></p>	<p> REDBIRD ADVANCED LEARNING 20 minutes each night. <input type="checkbox"/></p>	<p>Mia has gymnastics class 2 hours after school. School lets out at 2:30. Mia's little sister says Mia has gymnastics at 3:30 is she correct? Why or Why not? Explain your thinking below and draw the hands on the analog clock. Write the correct time on the digital clock.</p> <hr/> <hr/> <hr/> <hr/> <hr/> <hr/> <hr/> <hr/>
<p>Fluency Passage</p>  <p><input type="checkbox"/></p>	<p>Sherry has 3 dimes and 13 pennies. She wants to buy an eraser for 45cents. Does she have enough money to buy the eraser? Why or Why not? Explain your thinking.</p> <hr/> <hr/> <hr/> <hr/> <hr/> <hr/> <hr/> <hr/> <p><input type="checkbox"/></p>	<p> </p>
<p> 20 minutes each night <input type="checkbox"/></p>	<p>Complete the attached math page. <input type="checkbox"/></p>	<p>2:30 <input type="checkbox"/></p> <p>school dismissal time gymnastics class</p>

Parent Signature _____

Important Notes

- Please send a note for all transportation changes.
- Our lunch is very early, students may bring a snack each day.

All homework should be done in the homework journal provided. Please date the homework assignments to make it easy for grading. Only use one page daily, and if multiple assignments can fit on one page, please do so. Homework is due each Friday.

FLUENCY PASSAGE

Directions: Set a timer for one minute. Read the following passage aloud as quickly and as accurately as you can. Record how many words you read correctly at the bottom of this page. Repeat one more time. Do this Monday through Thursday. The purpose of this activity is to increase reading fluency.

Maggy's Flower

Maggy is a brown cow. Maggy	6
is big and powerful. She is the	13
most powerful cow in town.	18
Maggy plows. The farmer's	22
pals are amazed at how well	28
Maggy plows. Maggy sees a	33
lonely flower. Maggy frowns.	37
Maggy scowls. Maggy stops her	42
plow. Maggy is allowed to keep	48
her flower. The flower makes	53
Maggy happy, and when Maggy	58
is happy, she plows.	62

By signing below, I am acknowledging that my child has read the passage above aloud to me two times.

Monday		Tuesday		Wednesday		Thursday	
1 st Try	_____ Words	1 st Try	_____ Words	1 st Try	_____ Words	1 st Try	_____ Words
2 nd Try	_____ Words	2 nd Try	_____ Words	2 nd Try	_____ Words	2 nd Try	_____ Words
<i>Parent/Guardian Signature:</i> _____		<i>Parent/Guardian Signature:</i> _____		<i>Parent/Guardian Signature:</i> _____		<i>Parent/Guardian Signature:</i> _____	

Find 4 items around your house to measure. First, use your shoes to measure the items. Then, use your mom or dad's shoes to measure the items. Finally, use your brother or sister's shoes to measure the items. Record your results on the table below. Don't forget to include a label!

Item I measured	My Shoes	<u> </u> Shoes	<u> </u> Shoes

If we used baby shoes to measure, do you think it would take more or less of them to measure the same items? Why?
